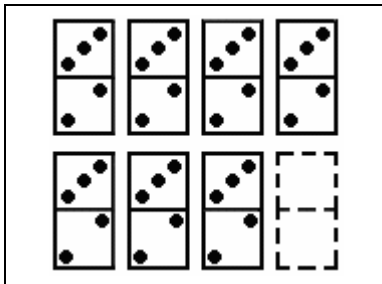


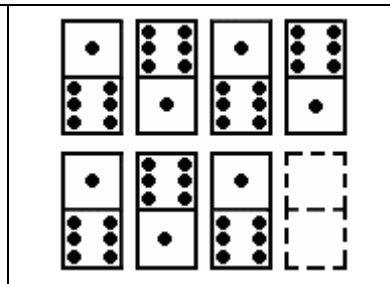
**EXPLICACIÓN:**

Son pruebas clásicas, en las que Vd., tendrá que descubrir la secuencia u orden que llevan las fichas y averiguar la que sigue el orden lógico

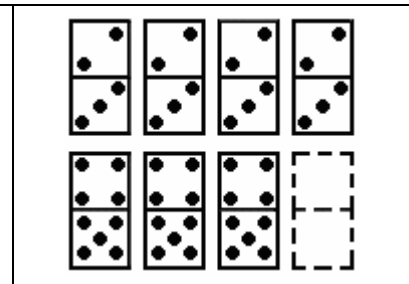
1.-



2.-




3.-




1.-	A	2/3	B	2/2	C	3/2	D	3/3
2.-	A	6/1	B	1/6	C	1/1	D	6/6
3.-	A	5/5	B	4/5	C	4/4	D	5/4

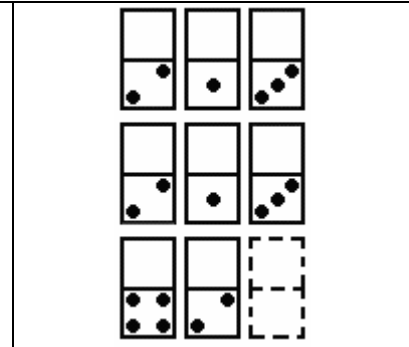
4.-



5.-

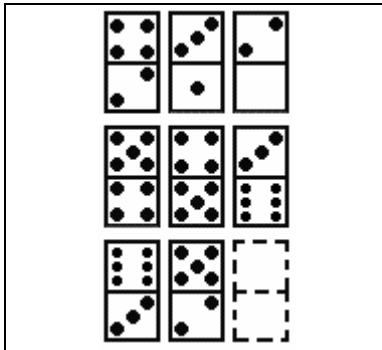


6.-

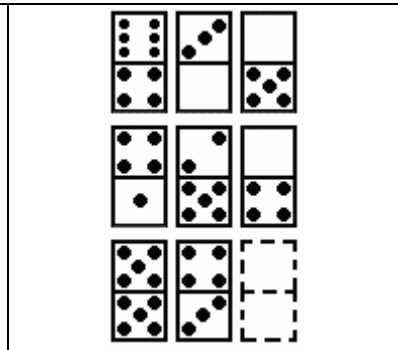


4.-	A	4/2	B	3/2	C	2/2	D	0/0
5.-	A	1/5	B	6/3	C	5/1	D	3/6
6.-	A	0/6	B	2/3	C	6/1	D	0/4

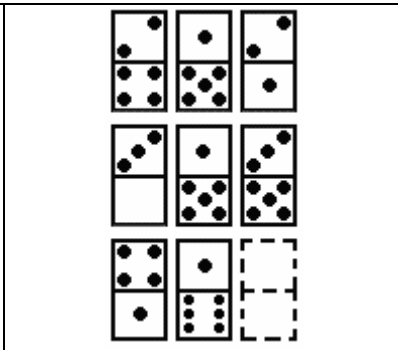
7.-



8.-




9.-




7.-	A	2/3	B	4/1	C	5/0	D	3/4
8.-	A	3/3	B	3/2	C	2/6	D	0/1
9.-	A	4/5	B	3/2	C	1/4	D	3/1

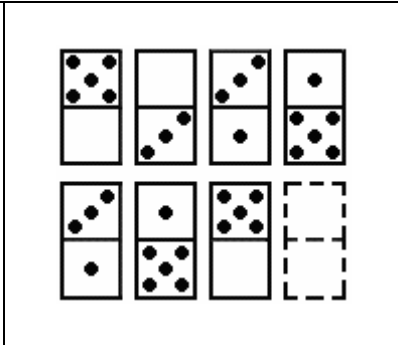
10.-



11.-

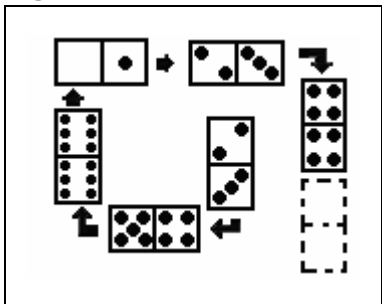


12.-

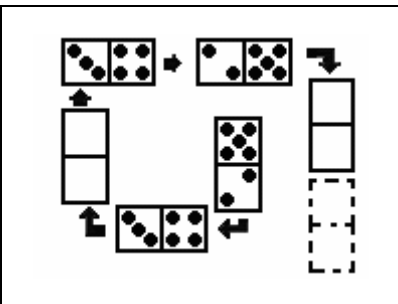


10.-	A	0/6	B	3/2	C	3/1	D	6/3
11.-	A	5/6	B	5/3	C	4/1	D	3/5
12.-	A	3/0	B	2/4	C	0/3	D	4/1

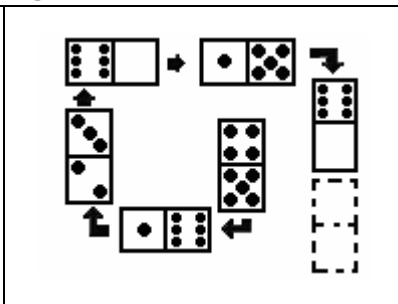
13.-



14.-

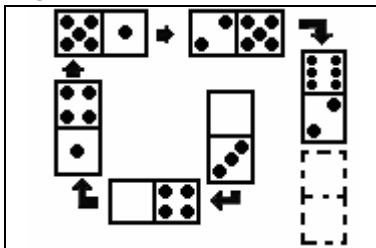


15.-

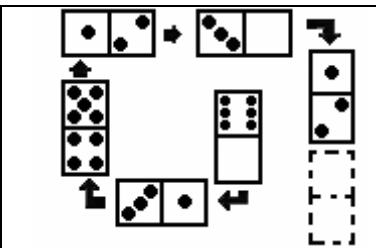


13.-	A	2/3	B	4/0	C	2/3	D	5/6
14.-	A	5/2	B	4/6	C	5/0	D	1/6
15.-	A	4/2	B	1/2	C	5/6	D	3/0

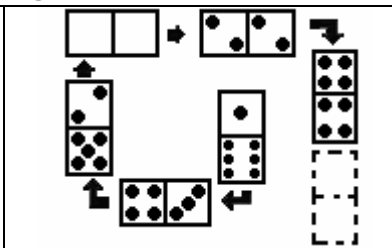
16.-



17.-

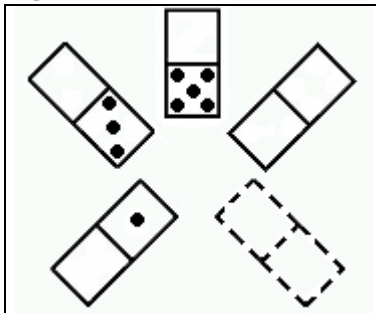


18.-

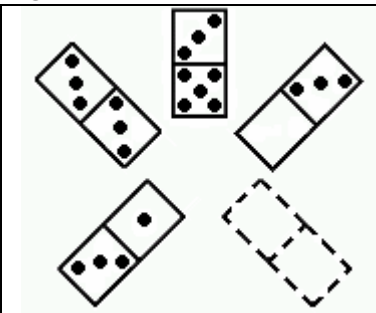


16.-	A	4/5	B	6/0	C	3/6	D	2/3
17.-	A	2/5	B	0/1	C	4/3	D	6/2
18.-	A	6/6	B	2/0	C	3/1	D	4/5

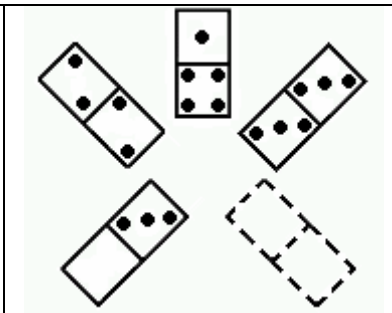
19.-



20.-




21.-




19.-	A	2/0	B	4/0	C	5/0	D	6/0
20.-	A	2/3	B	4/3	C	6/3	D	0/3
21.-	A	4/3	B	0/1	C	3/4	D	5/2


22.-



23.-

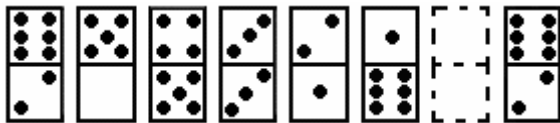


24.-



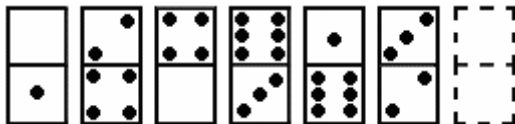
22.-	A	3/5	B	1/4	C	2/5	D	6/3
23.-	A	2/5	B	2/4	C	2/2	D	2/3
24.-	A	2/3	B	5/1	C	0/4	D	6/1

25.-



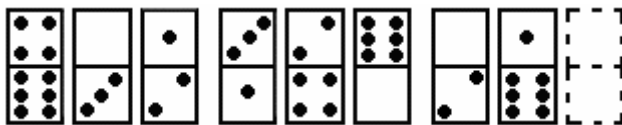
A	B	C	D
2/1	3/3	0/4	5/0

26.-



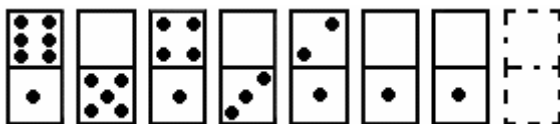
A	B	C	D
5/5	2/1	3/3	0/6

27.-




A	B	C	D
6/0	1/2	2/6	4/3

28.-



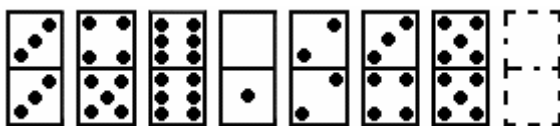
A	B	C	D
	0/6		

29.-



A	B	C	D
2/2	3/6	1/3	6/2

30.-



A	B	C	D
3/4	6/0	0/5	3/2